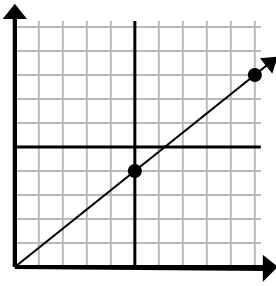




Determine which choice represents a point on the line if it were to continue.

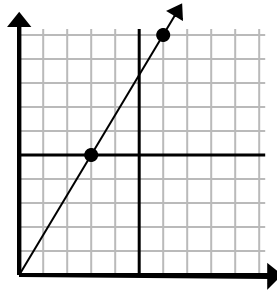
Answers

1)



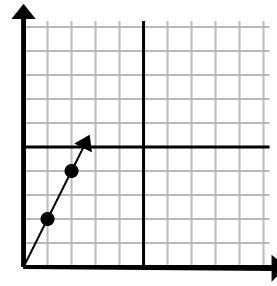
- A. (15, 12)
- B. (11, 5)
- C. (12, 5)
- D. (11, 8)

2)



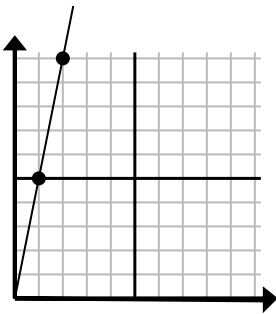
- A. (7, 10)
- B. (9, 15)
- C. (9, 8)
- D. (8, 9)

3)



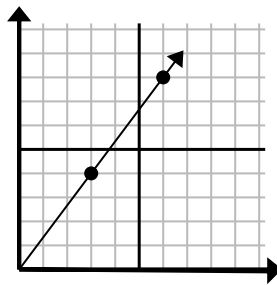
- A. (4, 3)
- B. (7, 5)
- C. (3, 6)
- D. (5, 7)

4)



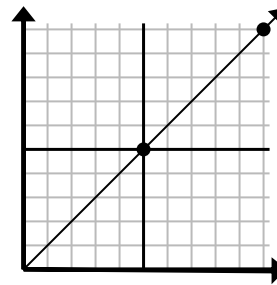
- A. (4, 10)
- B. (7, 9)
- C. (3, 15)
- D. (4, 8)

5)



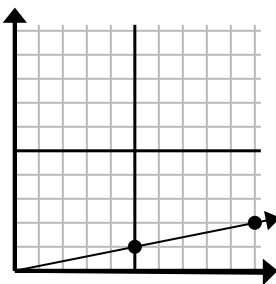
- A. (9, 8)
- B. (9, 5)
- C. (10, 7)
- D. (9, 12)

6)



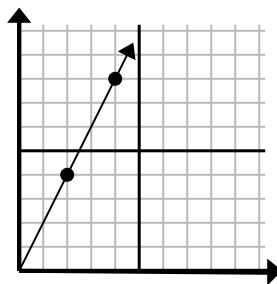
- A. (15, 8)
- B. (12, 8)
- C. (15, 15)
- D. (11, 8)

7)



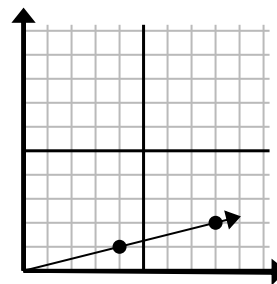
- A. (15, 2)
- B. (15, 3)
- C. (12, 2)
- D. (15, 5)

8)



- A. (6, 12)
- B. (6, 6)
- C. (6, 8)
- D. (5, 6)

9)

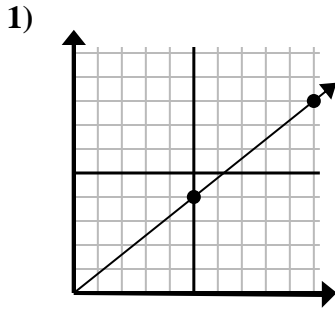


- A. (12, 4)
- B. (12, 5)
- C. (12, 3)
- D. (11, 6)

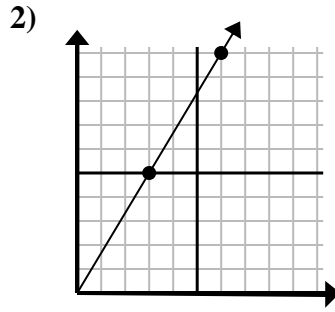
1. \_\_\_\_\_
2. \_\_\_\_\_
3. \_\_\_\_\_
4. \_\_\_\_\_
5. \_\_\_\_\_
6. \_\_\_\_\_
7. \_\_\_\_\_
8. \_\_\_\_\_
9. \_\_\_\_\_



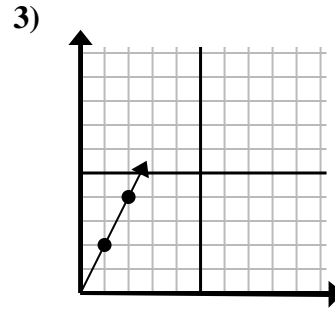
Determine which choice represents a point on the line if it were to continue.



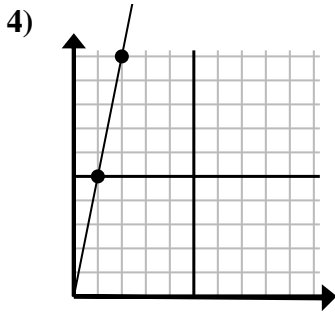
- A. (15, 12)
- B. (11, 5)
- C. (12, 5)
- D. (11, 8)



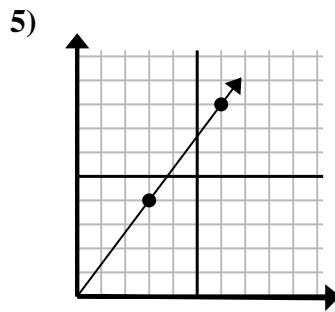
- A. (7, 10)
- B. (9, 15)
- C. (9, 8)
- D. (8, 9)



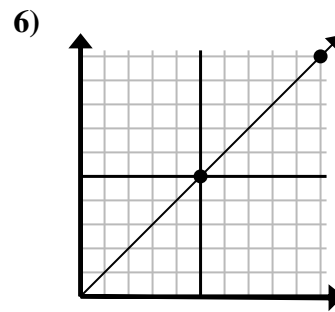
- A. (4, 3)
- B. (7, 5)
- C. (3, 6)
- D. (5, 7)



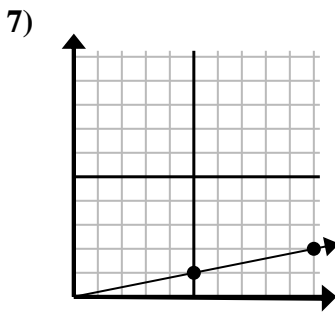
- A. (4, 10)
- B. (7, 9)
- C. (3, 15)
- D. (4, 8)



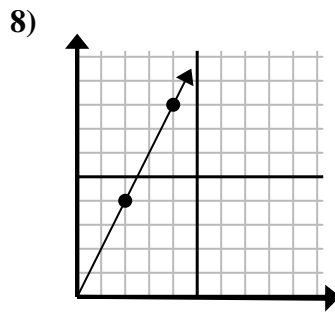
- A. (9, 8)
- B. (9, 5)
- C. (10, 7)
- D. (9, 12)



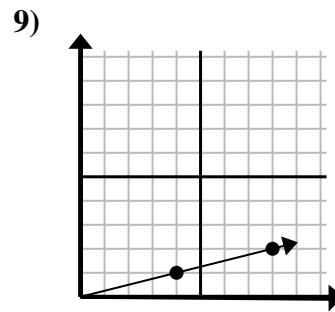
- A. (15, 8)
- B. (12, 8)
- C. (15, 15)
- D. (11, 8)



- A. (15, 2)
- B. (15, 3)
- C. (12, 2)
- D. (15, 5)



- A. (6, 12)
- B. (6, 6)
- C. (6, 8)
- D. (5, 6)



- A. (12, 4)
- B. (12, 5)
- C. (12, 3)
- D. (11, 6)

Answers

- 1.     **A**
- 2.     **B**
- 3.     **C**
- 4.     **C**
- 5.     **D**
- 6.     **C**
- 7.     **B**
- 8.     **A**
- 9.     **C**